

Worksheet IV

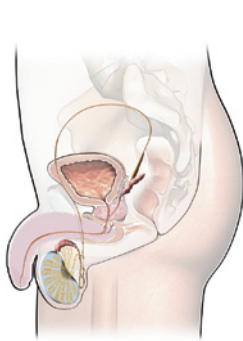
Name and surname:

Form: Date:

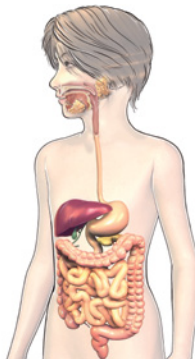
ORGANS AND SYSTEMS

A Mark the image of the systems that carry out the reproduction function with a blue **X**; with a green **X**, the image of those which carry out the nutrition function; and with a red **X** the image of those responsible for the interaction function.

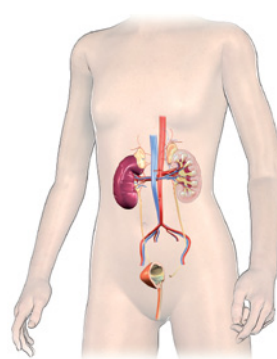
B Write the names of each one of the systems shown.



1.



2.



3.



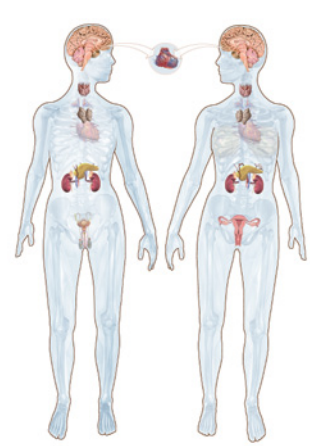
4.



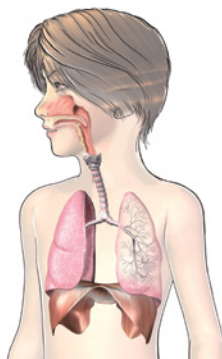
5.



6.



7.



8.



9.



10.



11.